






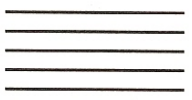
1 Escriu el nom de les notes següents.





2 Escriu les notes i compta les de l'activitat anterior.


Exemple


sol  7


do₃ 


mi 

si 

re 

la 

fa 

do₄ 

1 Completa el dibuix i pinta'l.

A Quin instrument és? _____

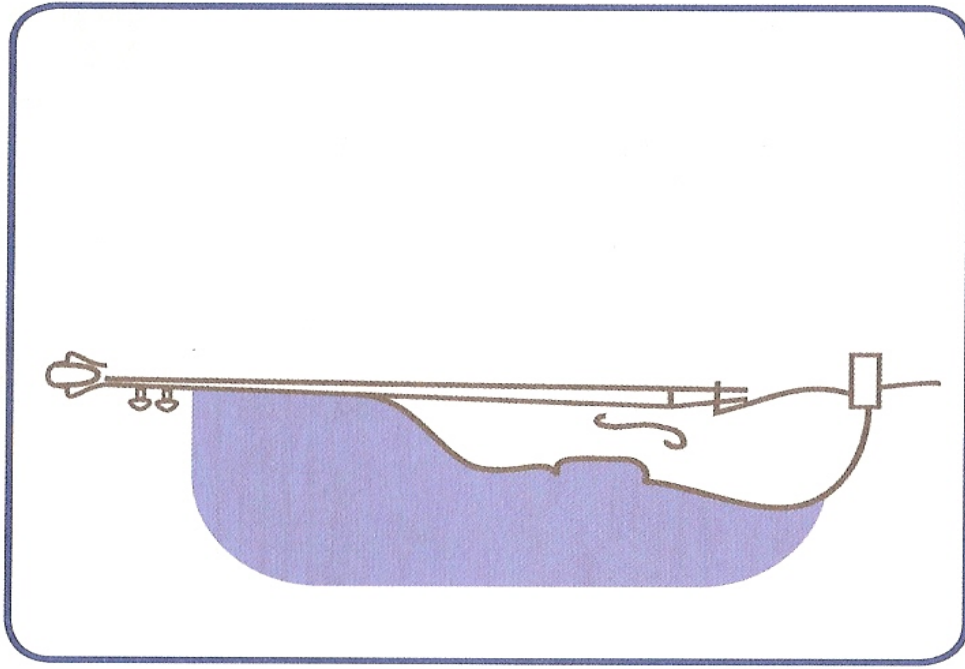
B A quina família pertany? _____

2 Quins altres instruments pertanyen a la mateixa família?

A _____

B _____

C _____





.....



.....



.....



.....



.....

A	M	M	V	C	M	A	B	P	W
A	A	A	I	R	E	F	O	A	G
C	N	R	O	O	L	L	M	N	U
O	D	A	L	T	O	A	B	D	I
R	O	C	I	A	D	U	O	E	T
D	L	A	N	L	I	T	U	R	A
I	I	X	U	S	C	A	I	E	R
O	N	A	I	P	A	R	N	T	R
M	A	N	D	O	L	I	N	A	A
T	R	I	A	N	G	L	E	M	S



.....



.....



.....



.....

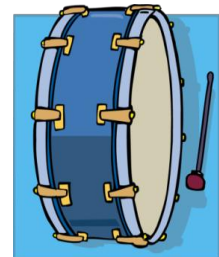


.....



.....

ACORDIO	PIANO
BOMBO	VIOLÍ
GUITARRA	TRIANGLE
MELÓDICA	MANDOLINA
MARACA	CROTALS
FLAUTA	PANDERETA



.....